

**Paper Reference 4EC1/02**  
**Pearson Edexcel**  
**International GCSE**

# **Economics**

**Level 1/2**

**Paper 2: Macroeconomics and the Global  
Economy**

**Monday 3 June 2019 – Afternoon**

## **Data Book**

**In the boxes below, write your name, centre number  
and candidate number.**

<b>Surname</b>					
<b>Other names</b>					
<b>Centre Number</b>					
<b>Candidate Number</b>					

## INSTRUCTIONS

There may be spare copies of some data sheets in case you need them.

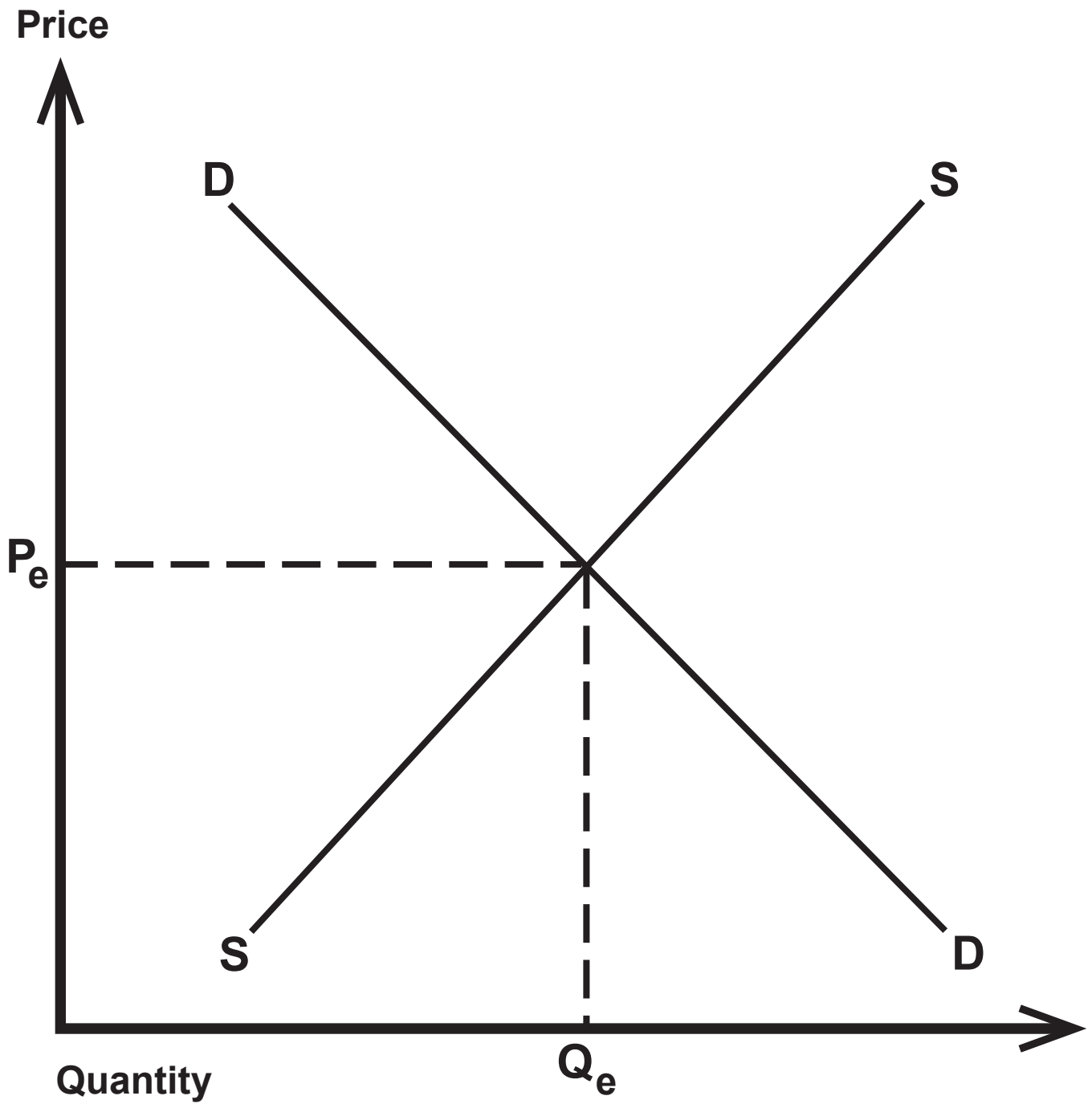
**THIS DATA BOOK **MUST** BE RETURNED WITH  
THE QUESTION PAPER AT THE END OF THE  
EXAMINATION.**

## **Contents**

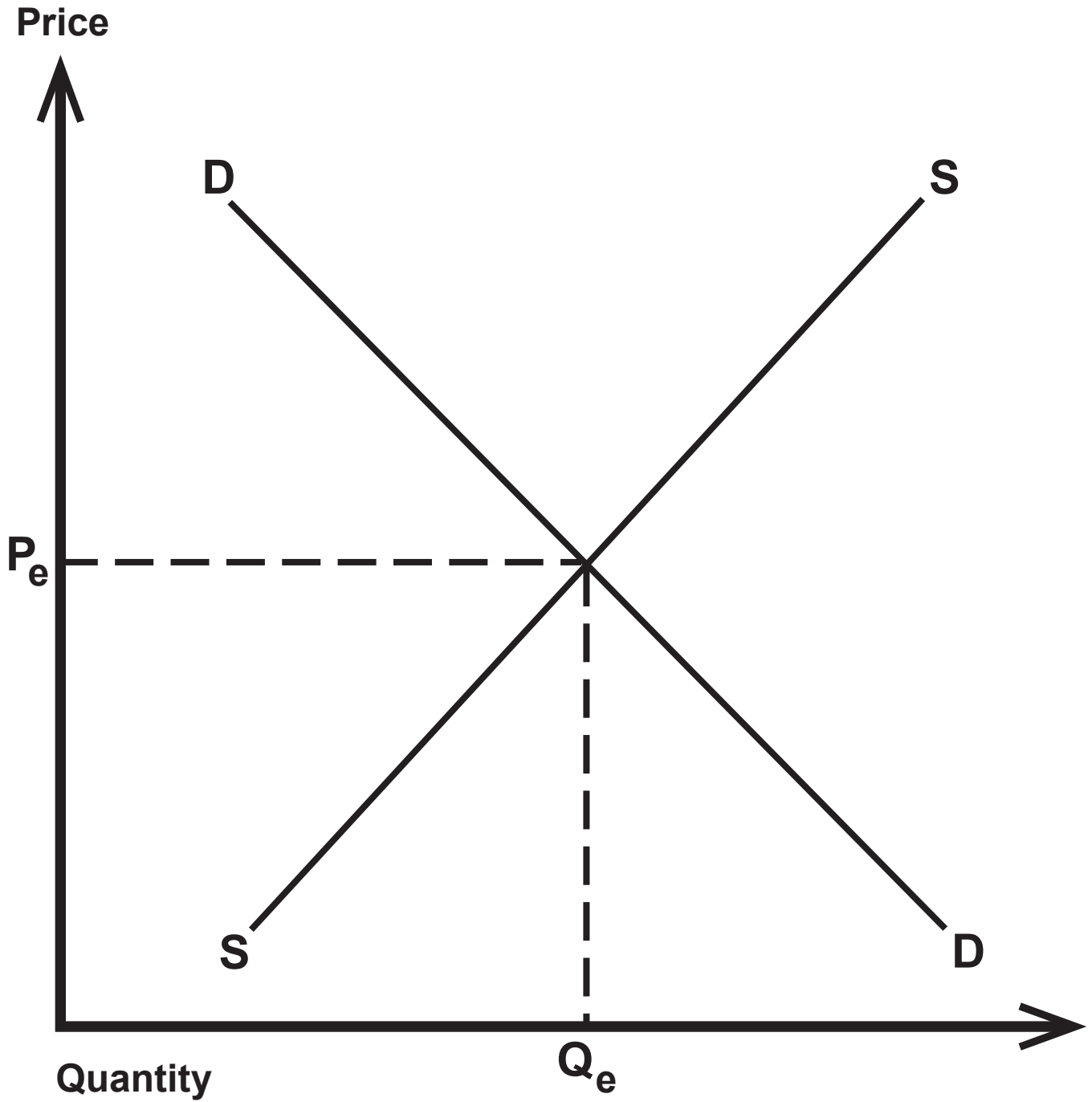
### **Page**

<b>4</b>	<b>Question 1(f)</b>
<b>5</b>	<b>Question 1(f) (Spare copy)</b>
<b>6</b>	<b>Question 2(g)</b>
<b>7</b>	<b>Question 3(e)</b>
<b>8</b>	<b>Question 4</b>

## Question 1(f)



## Question 1(f)



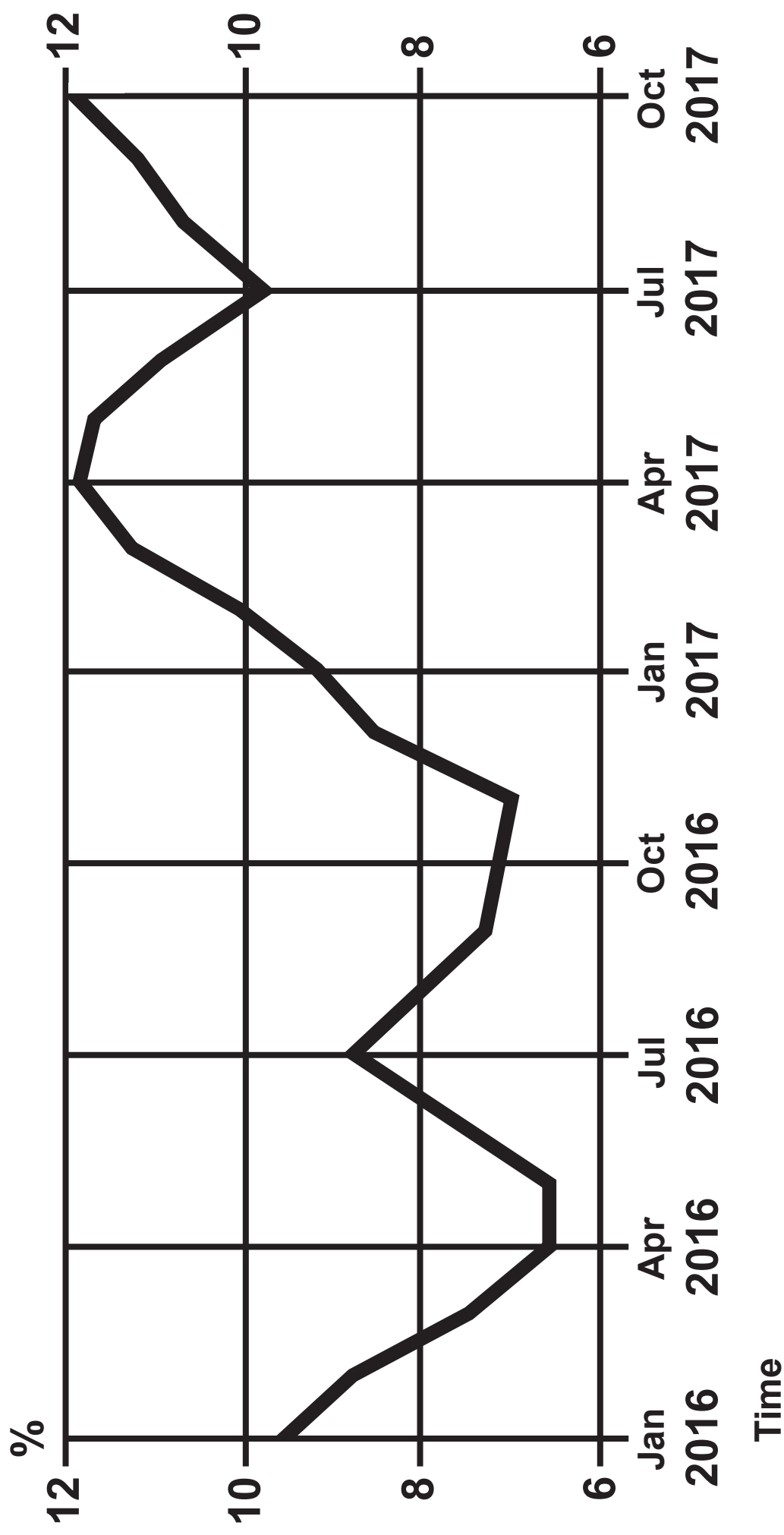
## Question 2(g)

	<b>1967</b> <b>ASEAN-5</b> Indonesia, Malaysia, the Philippines, Singapore and Thailand	<b>2016</b> <b>ASEAN-10</b> Brunei, Laos, Vietnam, Myanmar, Cambodia, Indonesia, Malaysia, the Philippines, Singapore and Thailand
Population	185 Million	634 Million
Land	2 950 Thousand Km <sup>2</sup>	4 326 Thousand Km <sup>2</sup>
Life Expectancy	56 Years	71 Years
GDP/Capita	\$122 Current Prices (US)	\$4 021 Current Prices (US)
Trade	\$9 707 Million (US)	\$2 218 534 Million (US)

(Source: adapted from <https://www.fwd.news/50-years-major-regional-trading-bloc-looks-closer-cooperation/>)

Question 3(e)

Turkey's inflation rate (%)



## Question 4

	<b>2016</b>
<b>Population (million)</b>	<b>92·7</b>
<b>GDP (US\$ million)</b>	<b>202 600</b>

(Source: © 2018 The World Bank Group)